



Cambridge International AS & A Level

CANDIDATE
NAME

--

CENTRE
NUMBER

--	--	--	--	--

CANDIDATE
NUMBER

--	--	--	--



BIOLOGY

9700/52

Paper 5 Planning, Analysis and Evaluation

October/November 2020

1 hour 15 minutes

You must answer on the question paper.

No additional materials are needed.

INSTRUCTIONS

- Answer **all** questions.
- Use a black or dark blue pen. You may use an HB pencil for any diagrams or graphs.
- Write your name, centre number and candidate number in the boxes at the top of the page.
- Write your answer to each question in the space provided.
- Do **not** use an erasable pen or correction fluid.
- Do **not** write on any bar codes.
- You may use a calculator.
- You should show all your working and use appropriate units.

INFORMATION

- The total mark for this paper is 30.
- The number of marks for each question or part question is shown in brackets [].

This document has **12** pages. Blank pages are indicated.

- 1 Some students observed a flowering plant and noticed that the flower was supported by a long stalk.

To investigate how the stalk supported the flower, the students first cut transverse sections of the stalk. The students then used a light microscope to observe the transverse sections of the stalk.

Fig. 1.1 shows a plan diagram of a transverse section of the stalk.

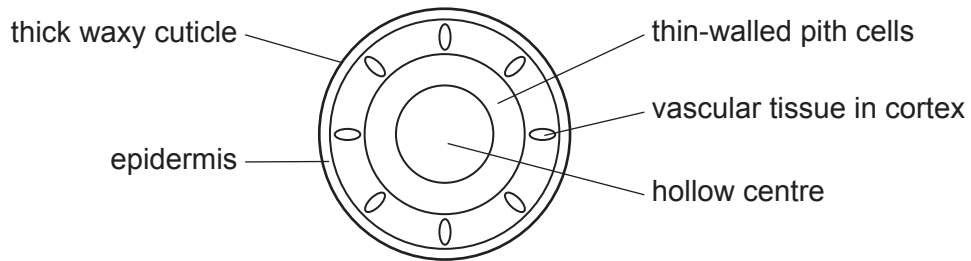


Fig. 1.1

Fig. 1.2 shows the appearance of two cells from each of the layers.

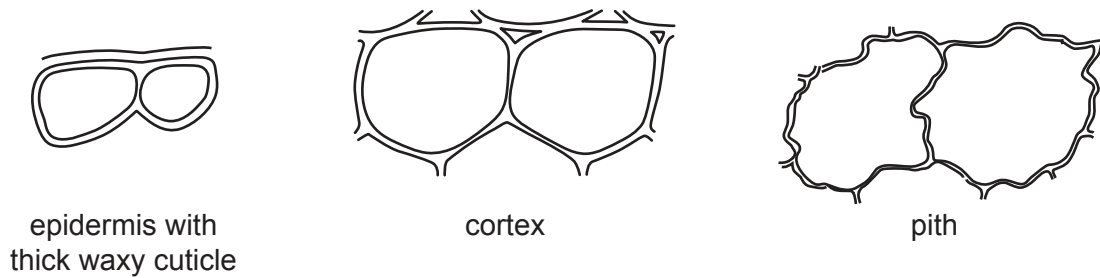


Fig. 1.2

The students cut out a piece of stalk that was 40 mm long and then split this lengthways into 4 strips, as shown in Fig. 1.3.

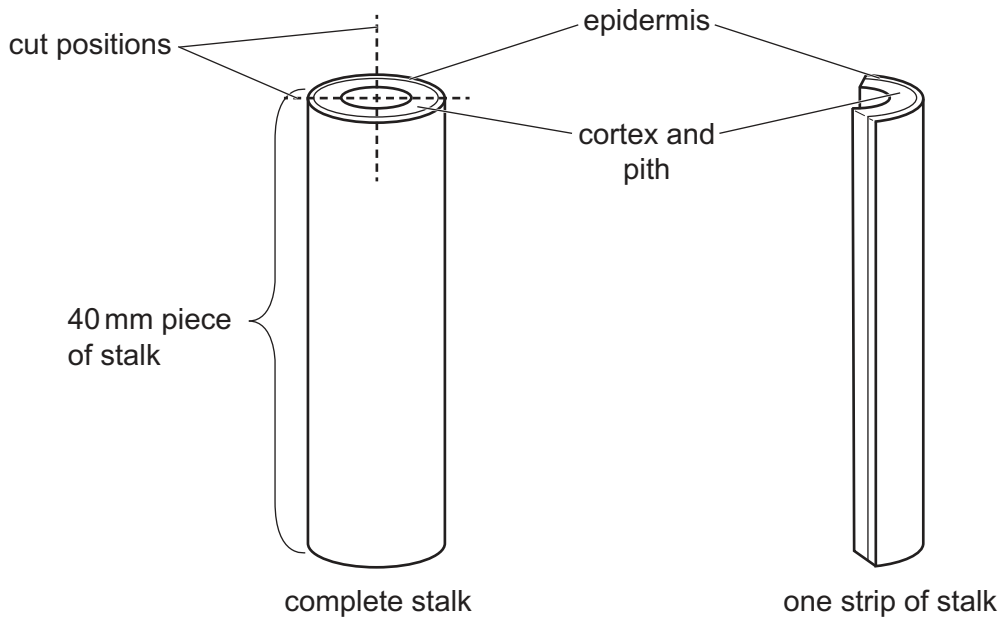


Fig. 1.3

The students observed that the strips immediately curved lengthways so that the epidermis was on the **inside** of the curve.

All the strips were put into a Petri dish containing water and left for a period of time.

After soaking in water, the strips curved even further.

Fig. 1.4 shows the appearance of a strip after being soaked in water, viewed from one end.

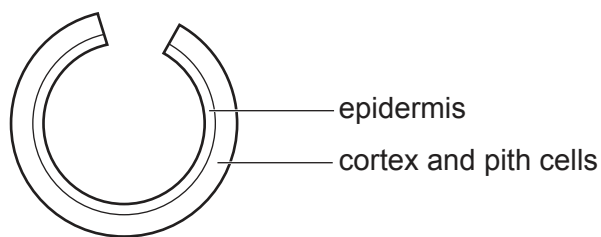


Fig. 1.4

(a) State what conclusions can be made about the role of the stalk cells in supporting the flower.

.....

.....

.....

.....

.....

.....

..... [2]

(b) In another investigation to find the **water potential** of the tissues in the flower stalk the students decided to:

- put strips in different concentrations of sucrose solution
- observe the direction and degree of curvature of the strips
- calculate the angle of curvature of the strips from photographs, using a mathematical procedure that they found on the internet.

The students were provided with a 1.0 mol dm^{-3} sucrose solution. They decided to use this to make a range of sucrose solutions. They made 50 cm^3 of each solution.

(i) Suggest a suitable range of solutions the students should use **and** describe how these solutions could be made by **proportional** dilution of the 1.0 mol dm^{-3} sucrose solution.

.....
.....
.....
.....
.....
.....
.....
.....
.....
.....
..... [3]

(ii) State the independent variable **and** the dependent variable in this investigation.

independent variable
.....
dependent variable
..... [2]

- (c) Fig. 1.5 shows the appearance of some strips of flower stalk after being immersed in high concentrations of sucrose solution and in low concentrations of sucrose solution.

The students measured the curvature of the epidermis of the strips.

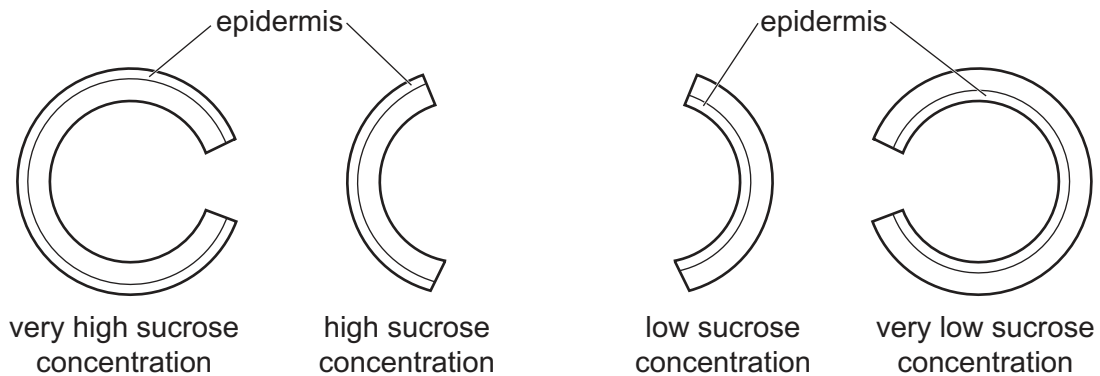


Fig. 1.5

- (i) Sketch a graph on Fig. 1.6 of the expected results of immersing strips of the flower stalks in sucrose solutions of different concentration.

Include axes labels and units.

Indicate how this graph could be used to estimate the sucrose concentration equivalent to the water potential of the tissues in the flower stalk.



[4]

Fig. 1.6

- (ii) Predict the appearance of the strip in a sucrose solution that has the **same** water potential as the cells of the strip.

.....
 [1]

[Total: 19]

- 2 Water hyacinth, *Eichhornia crassipes*, is a plant that grows on the surface of waterways such as rivers and lakes and is an alien species in many parts of the world. The plant grows and reproduces to form dense mats. As a result, water hyacinth outcompetes local species and reduces biodiversity.

Weevils are a group of insects that feed on water hyacinth. Certain species of weevil are used in South Africa as part of a programme to control the spread of water hyacinth.

Researchers carried out a two-stage investigation to assess the effect of weevils on water hyacinth.

Stage 1 was a pilot experiment in the laboratory. Stage 2 was a field experiment.

Stage 1: Pilot experiment

- Water hyacinth plants were collected from the river and kept in a laboratory.
- Each plant was kept in a separate bucket of river water for 6 weeks.
- During the 6 weeks, the plants were inspected twice a day and any insects, including weevils, were removed.
- Feeding scars (damage caused by insect feeding) were counted.
- At the end of the 6 weeks, the buckets containing the plants were divided into 6 groups.
- The length of the longest leaf stalk (petiole) of each plant was measured.
- The number of feeding scars on the second youngest leaf (leaf 2) of each plant was counted.

Each group was then given a different treatment, as shown in Table 2.1.

Table 2.1

group	treatment	
1	not sprayed with insecticide	no weevils added
2	not sprayed with insecticide	1 mating pair of weevils added after 1 week
3	sprayed with insecticide	no weevils added
4	sprayed with insecticide	1 mating pair of weevils added 1 week after spraying with insecticide
5	sprayed with insecticide	1 mating pair of weevils added 2 weeks after spraying with insecticide
6	sprayed with insecticide	1 mating pair of weevils added 3 weeks after spraying with insecticide

After 4 weeks, the effects of the treatments on water hyacinth were assessed.

The results are shown in Table 2.2.

Table 2.2

group	mean length of longest petiole / cm \pm s		mean number of feeding scars on leaf 2 \pm s	
	before treatment	after treatment	before treatment	after treatment
1	41 \pm 2.0	38 \pm 3.0	23 \pm 4.0	0
2	32 \pm 3.5	29 \pm 3.3	16 \pm 3.0	22 \pm 5.0
3	36 \pm 2.0	35 \pm 3.8	18 \pm 4.0	0.5 \pm 0.2
4	38 \pm 2.0	36 \pm 3.0	30 \pm 9.0	0.5 \pm 0.2
5	34 \pm 2.5	31 \pm 3.5	25 \pm 5.0	0.5 \pm 0.2
6	37 \pm 3.8	35 \pm 4.3	13 \pm 3.5	1.0 \pm 0.5

(a) (i) Explain the reason for spraying the water hyacinth plants with insecticide in treatment 3.

.....

 [2]

(ii) Explain why treatment 2 and treatments 4, 5 and 6 were included in the experiment.

treatment 2

 treatments 4, 5 and 6

 [2]

(iii) Explain what the standard deviation (s) shows about the results in Table 2.2.

.....

 [2]

(iv) State **one** conclusion that can be made from the results in Table 2.2.

.....
 [1]

Stage 2: Field experiment

- 10 plots, each of 20 m², were marked out in a river.
- The plots were filled with water hyacinth plants.
- The plants were sampled at the start and the mean petiole length and number of feeding scars were recorded, as in the pilot experiment.
- 5 of the plots were sprayed with insecticide every three weeks.
- 5 of the plots were not sprayed, to allow weevils from the environment to feed on the plants.
- The plants were sampled after 33 weeks and the mean petiole length and number of feeding scars were recorded, as in the pilot experiment.

The results of the field experiment are shown in Fig. 2.1 and Fig. 2.2.

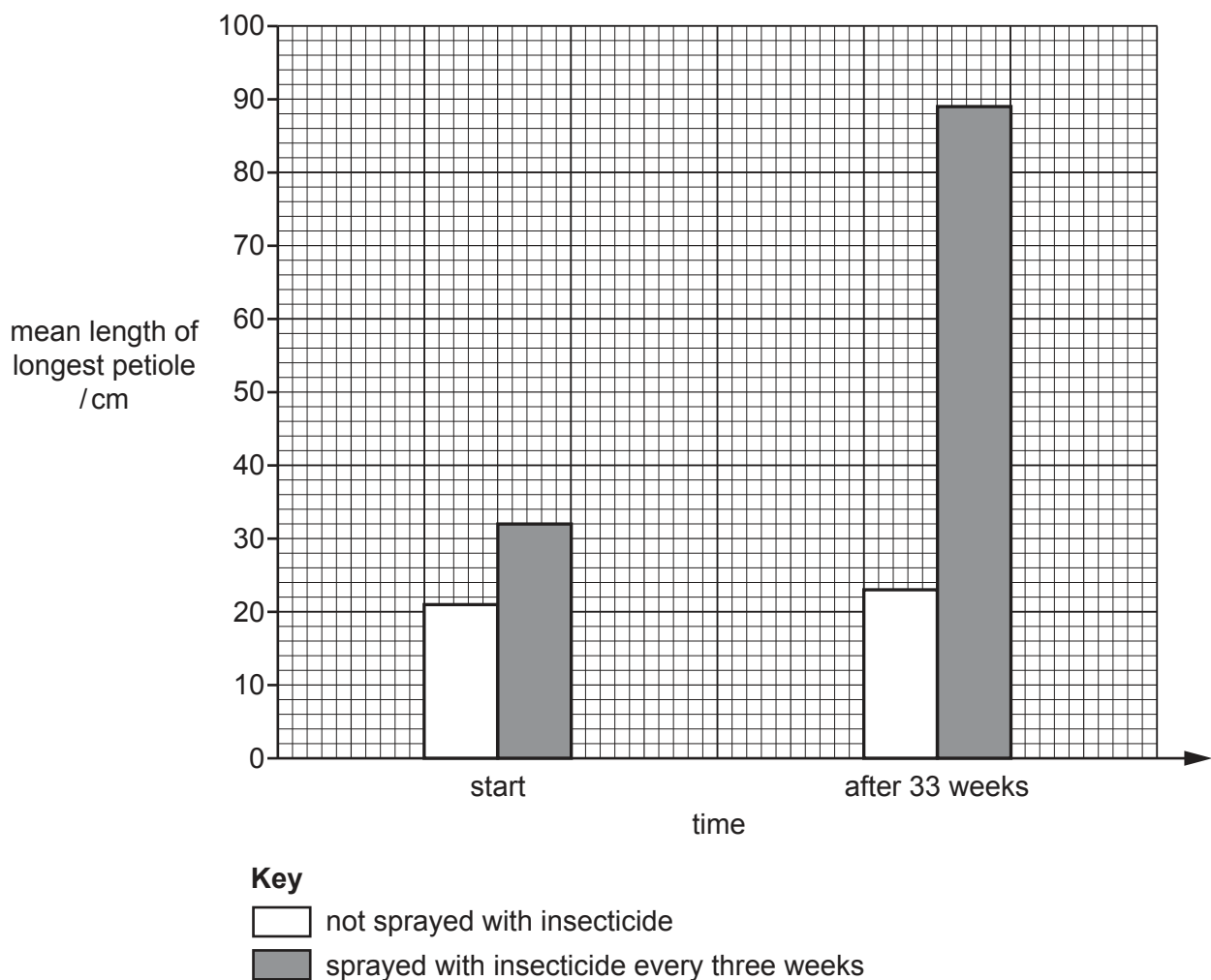


Fig. 2.1

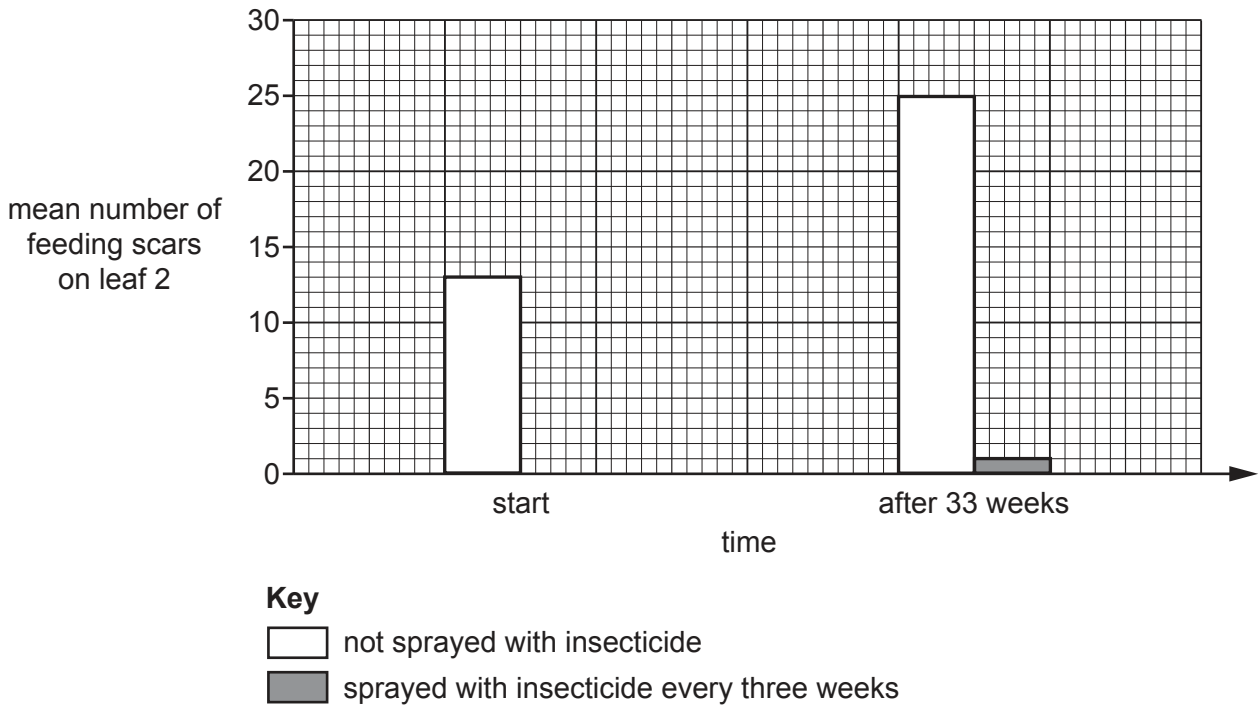


Fig. 2.2

- (b) (i) Calculate the percentage change in the mean length of the longest petiole for leaves sprayed with insecticide.

Show your working and give your answer to the nearest whole number.

.....% [2]

- (ii) State **one** reason why the *t*-test can be used to analyse the data in Fig. 2.2.

.....
 [1]

- (iii) State what information is needed to calculate the degrees of freedom used to determine if the calculated *t*-value is significant.

.....
 [1]

[Total: 11]

BLANK PAGE

Permission to reproduce items where third-party owned material protected by copyright is included has been sought and cleared where possible. Every reasonable effort has been made by the publisher (UCLES) to trace copyright holders, but if any items requiring clearance have unwittingly been included, the publisher will be pleased to make amends at the earliest possible opportunity.

To avoid the issue of disclosure of answer-related information to candidates, all copyright acknowledgements are reproduced online in the Cambridge Assessment International Education Copyright Acknowledgements Booklet. This is produced for each series of examinations and is freely available to download at www.cambridgeinternational.org after the live examination series.

Cambridge Assessment International Education is part of the Cambridge Assessment Group. Cambridge Assessment is the brand name of the University of Cambridge Local Examinations Syndicate (UCLES), which itself is a department of the University of Cambridge.